

Name: Last \_\_\_\_\_ First \_\_\_\_\_

**You must show your work and/or provide explanations for your answers for all questions. Otherwise, no credit will be given.**

**MULTIPLE CHOICE. Choose the one alternative that best completes the statement or answers the question.**

**Use a finite approximation to estimate the area under the graph of the given function on the stated interval as instructed.**

- 1)  $f(x) = x^2$  between  $x = 0$  and  $x = 3$  using an upper sum with two rectangles of equal width. 1) \_\_\_\_\_  
 A) 3.375                      B) 16.875                      C) 12.5                      D) 8.4375

**Write the sum without sigma notation and evaluate it.**

- 2)  $\sum_{k=1}^4 2 \sin \frac{\pi}{k}$  2) \_\_\_\_\_  
 A)  $2 \sin \pi + 2 \sin \frac{\pi}{2} + 2 \sin \frac{\pi}{3} + 2 \sin \frac{\pi}{4} = 6 + \sqrt{2}$   
 B)  $2 \sin \pi + 2 \sin \frac{\pi}{2} + 2 \sin \frac{\pi}{3} + 2 \sin \frac{\pi}{4} = 2 + \sqrt{3} + \sqrt{2}$   
 C)  $2 \sin \pi + 2 \sin \frac{\pi}{2} + 2 \sin \frac{\pi}{3} + 2 \sin \frac{\pi}{4} = 1 + \frac{\sqrt{3} + \sqrt{2}}{2}$   
 D)  $2 \sin \pi + 2 \sin \frac{\pi}{4} = \sqrt{2}$

**Solve the problem.**

- 3) Suppose that  $g$  is continuous and that  $\int_2^6 g(x) dx = 12$  and  $\int_2^9 g(x) dx = 16$ . Find  $\int_9^6 g(x) dx$ . 3) \_\_\_\_\_  
 A) -4                      B) 28                      C) -28                      D) 4

**Evaluate the integral.**

- 4)  $\int_0^4 2\sqrt{x} dx$  4) \_\_\_\_\_  
 A) 16                      B) 4                      C) 24                      D)  $\frac{32}{3}$
- 5)  $\int_1^2 \left(t + \frac{1}{t}\right)^2 dx$  5) \_\_\_\_\_  
 A)  $\frac{15}{2}$                       B)  $\frac{29}{6}$                       C)  $\frac{37}{6}$                       D)  $\frac{5}{6}$

Find the derivative.

6)  $y = \int_0^x \sqrt{10x + 5} dt$

6) \_\_\_\_\_

A)  $\frac{5}{\sqrt{10x + 5}}$

B)  $\frac{1}{15}(10x + 5)^{3/2}$

C)  $\sqrt{10x + 5}$

D)  $\sqrt{10x + 5} - \sqrt{5}$

7)  $y = \int_{x^4}^0 \cos \sqrt{t} dt$

7) \_\_\_\_\_

A)  $-4x^3 \cos(x^2)$

B)  $4x^3 \cos(x^2)$

C)  $1 - \cos(x^2)$

D)  $-\sin(x^2)$

8)  $\int_1^{x^{1/2}} e^{(t^2 + 1)} dt$

8) \_\_\_\_\_

A)  $\frac{e^{x+1} - e^2}{2x^{1/2}}$

B)  $\frac{e^{x+1}}{2x^{1/2}}$

C)  $e^{x+1}$

D)  $e^{x^2+1}$

Find the total area of the region between the curve and the x-axis.

9)  $y = x^2(x - 2)^2; 0 \leq x \leq 2$

9) \_\_\_\_\_

A)  $\frac{15}{17}$

B)  $\frac{16}{15}$

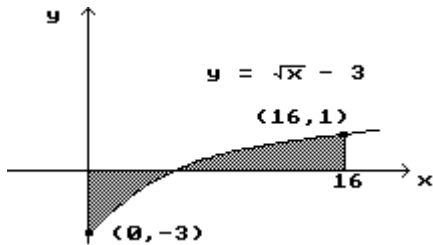
C)  $\frac{15}{16}$

D)  $\frac{17}{15}$

Find the area of the shaded region.

10)

10) \_\_\_\_\_



A)  $\frac{38}{3}$

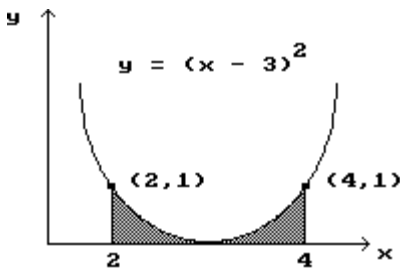
B)  $\frac{29}{3}$

C)  $\frac{22}{3}$

D)  $\frac{16}{3}$

11)

11) \_\_\_\_\_



A)  $\frac{1}{3}$

B)  $\frac{2}{3}$

C)  $\frac{5}{3}$

D)  $\frac{4}{3}$

**Solve the initial value problem.**

12)  $\frac{dy}{dx} = 12 \sin^2 x \cos x$ ,  $y(0) = 2$  12) \_\_\_\_\_

A)  $y = 4 \sin^3 x + 2$

B)  $y = 24 \sin x \cos x + 2$

C)  $y = -4 \sin^3 x - 2$

D)  $y = 6 \cos^2 x + 2$

**Solve the problem.**

13) Suppose that  $\int_1^x f(t) dt = 5x^2 + 9x - 2$ . Find  $f(x)$ . 13) \_\_\_\_\_

A)  $10x + 9$

B)  $\frac{5}{3}x^3 + \frac{5}{3}x^2 - 2x - 12$

C)  $\frac{5}{3}x^3 + \frac{9}{2}x^2 - 2x$

D)  $5x^2 + 9x - 2$

14) Suppose that  $f$  has a positive derivative for all values of  $x$  and that  $f(2) = 0$ . Which of the following 14) \_\_\_\_\_

statements must be true of the function  $g(x) = \int_0^x f(t) dt$  ?

A) The function  $g$  has a local minimum at  $x = 2$ .

B) The graph of  $g$  has an inflection point at  $x = 2$ .

C) The graph of  $g$  crosses the  $x$ -axis at  $x = 2$ .

D) The function  $g$  has a local maximum at  $x = 2$ .

**Evaluate the integral.**

15)  $\int x^5 \sqrt{x^6 + 8} dx$  15) \_\_\_\_\_

A)  $4(x^6 + 8)^{3/2} + C$

B)  $\frac{2}{3}(x^6 + 8)^{3/2} + C$

C)  $-\frac{1}{3}(x^6 + 8)^{-1/2} + C$

D)  $\frac{1}{9}(x^6 + 8)^{3/2} + C$

16)  $\int \frac{\sin t}{(9 + \cos t)^4} dt$  16) \_\_\_\_\_

A)  $\frac{1}{3(9 + \cos t)^3} + C$

B)  $\frac{1}{5(9 + \cos t)^5} + C$

C)  $\frac{3}{(9 + \cos t)^3} + C$

D)  $\frac{1}{(9 + \cos t)^3} + C$

17)  $\int \frac{e^x dx}{\sqrt{1 - e^{2x}}}$  17) \_\_\_\_\_

A)  $-2\sqrt{1 - e^{2x}} + C$

B)  $\sec^{-1}(e^x) + C$

C)  $\sin^{-1}(e^x) + C$

D)  $e^x \sin^{-1}(e^x) + C$

$$18) \int \frac{dt}{3(\tan^{-1} t)(1+t^2)}$$

18) \_\_\_\_\_

A)  $3 \cot^{-1} t + C$

B)  $\frac{1}{3(\tan^{-1} t)^2} + C$

C)  $\frac{1}{3} \ln | \tan^{-1} t | + C$

D)  $\ln | 3 \tan^{-1} t | + C$

Evaluate the integral by using multiple substitutions.

$$19) \int 3(3x^2 - 7) \sin^5 (x^3 - 7x) \cos (x^3 - 7x) dx$$

19) \_\_\_\_\_

A)  $\frac{1}{2} \sin^6 (x^3 - 7x) + C$

B)  $15 \sin^4 (x^3 - 7x) + C$

C)  $\frac{1}{2} \cos^6 (3x^2) + C$

D)  $2 \sin^6 (x^3 - 7x) + C$

Use the substitution formula to evaluate the integral.

$$20) \int_{\pi}^{3\pi/2} \frac{\sin \theta d\theta}{2 + \cos \theta}$$

20) \_\_\_\_\_

A)  $-\ln 2$

B)  $-\ln 3$

C)  $0$

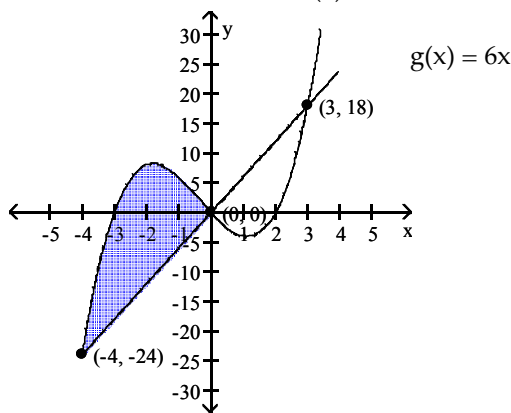
D)  $\ln 3$

Find the area of the shaded region.

21)

$$f(x) = x^3 + x^2 - 6x$$

21) \_\_\_\_\_



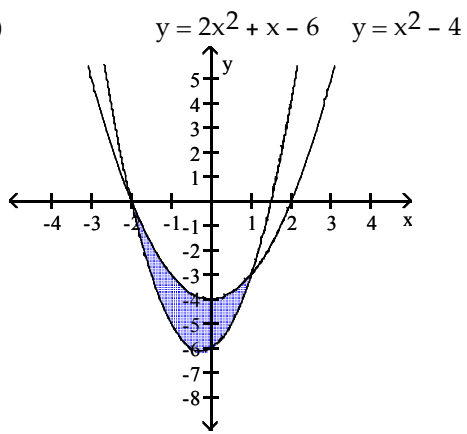
A)  $\frac{81}{12}$

B)  $\frac{640}{12}$

C)  $\frac{343}{12}$

D)  $\frac{768}{12}$

22)



22) \_\_\_\_\_

A)  $\frac{9}{2}$

B)  $\frac{19}{3}$

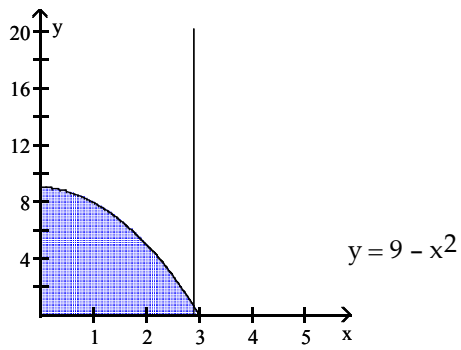
C)  $\frac{11}{6}$

D)  $\frac{8}{3}$

Find the volume of the solid generated by revolving the shaded region about the given axis.

23) About the x-axis

23) \_\_\_\_\_



A)  $18\pi$

B)  $\frac{1053}{5}\pi$

C)  $\frac{648}{5}\pi$

D)  $\frac{3159}{5}\pi$

## Answer Key

Testname: MATH1540-Q4 PRACTICE

- 1) B
- 2) B
- 3) A
- 4) D
- 5) B
- 6) C
- 7) A
- 8) B
- 9) B
- 10) A
- 11) B
- 12) A
- 13) A
- 14) A
- 15) D
- 16) A
- 17) C
- 18) C
- 19) A
- 20) A
- 21) B
- 22) A
- 23) C