

Student: \_\_\_\_\_  
Date: \_\_\_\_\_

Instructor: Robert Brown  
Course: Calculus I Spring 2019 Math  
1540 Dr. Bob Brown CRN 20506

Assignment: Calculus I Test 4 Practice 2

1. Express the sum in sigma notation.

$$2 + 4 + 6 + 8 + 10$$

- A.  $\sum_{k=1}^5 2(k+1)$
- B.  $\sum_{k=1}^6 2k$
- C.  $\sum_{k=0}^4 2(k+1)$
- D.  $\sum_{k=2}^5 2(k-1)$

ID: 5.2-13

2. Use a finite approximation to estimate the area under the graph of the given function on the stated interval as instructed.

$f(x) = x^2$  between  $x = 3$  and  $x = 7$  using an upper sum with four rectangles of equal width.

- A. 117
- B. 126
- C. 105
- D. 86

ID: 5.1-6

3. Write the sum without sigma notation and evaluate it.

$$\sum_{k=1}^4 2 \cos \frac{\pi}{k}$$

- A.  $2 \cos \pi + 2 \cos \frac{\pi}{4} = -2 + \sqrt{2}$
- B.  $2 \cos \pi + 2 \cos \frac{\pi}{2} + 2 \cos \frac{\pi}{3} + 2 \cos \frac{\pi}{4} = 3 + \sqrt{2}$
- C.  $2 \cos \pi + 2 \cos \frac{\pi}{2} + 2 \cos \frac{\pi}{3} + 2 \cos \frac{\pi}{4} = -2 + \sqrt{3} + \sqrt{2}$
- D.  $2 \cos \pi + 2 \cos \frac{\pi}{2} + 2 \cos \frac{\pi}{3} + 2 \cos \frac{\pi}{4} = -1 + \sqrt{2}$

ID: 5.2-4

4. Suppose that  $\int_{-6}^{-3} g(t) dt = 4$ . Find  $\int_{-6}^{-3} \frac{g(x)}{4} dx$  and  $\int_{-3}^{-6} -g(t) dt$ .

- A. 0; 4  
 B. 1; -4  
 C. 1; 4  
 D. -1; -4

ID: 5.3-10

5. Suppose that  $g$  is continuous and that  $\int_1^5 g(x) dx = 6$  and  $\int_1^9 g(x) dx = 16$ . Find  $\int_9^5 g(x) dx$ .

- A. 10  
 B. 22  
 C. -10  
 D. -22

ID: 5.3-14

6. Evaluate the integral  $\int_0^{5/2} t^2 dt$ .

The value of the integral  $\int_0^{5/2} t^2 dt =$  \_\_\_\_\_ .  
 (Type a simplified fraction.)

ID: 5.3.35

7. Evaluate the integral.

$$\int_0^4 (5x^2 - 8x + 6) dx$$

$\int_0^4 (5x^2 - 8x + 6) dx =$  \_\_\_\_\_  
 (Simplify your answer.)

ID: 5.4.2

8. Evaluate the integral.

$$\int_0^3 (x+2)^3 dx$$

---

- A. 63  
 B. 609  
 C.  $\frac{609}{4}$   
 D.  $\frac{625}{4}$

ID: 5.4-2

---

9. Evaluate the following integral.

$$\int_0^2 7x(x-7)dx$$

---

$$\int_0^2 7x(x-7)dx = \underline{\hspace{2cm}} \text{ (Simplify your answer.)}$$

ID: 5.4.1

---

10. Evaluate the definite integral  $\int_{-5}^4 \frac{2}{(x-6)^4} dx$ .

---

$$\int_{-5}^4 \frac{2}{(x-6)^4} dx = \underline{\hspace{2cm}} \text{ (Simplify your answer.)}$$

ID: 5.4.3

---

11. Evaluate the following integral.

$$\int_0^{\frac{\pi}{8}} \sin 2x \, dx$$


---

$$\int_0^{\frac{\pi}{8}} \sin 2x \, dx = \underline{\hspace{2cm}}$$

(Type an exact answer, using radicals as needed.)

ID: 5.4.17

---

12. Evaluate the following integral.

$$\int_0^{\pi/4} \tan^2 x \, dx$$


---

$$\int_0^{\pi/4} \tan^2 x \, dx = \underline{\hspace{2cm}} \text{ (Type an exact answer in terms of } \pi \text{.)}$$

ID: 5.4.15

---

13. Find the derivative.

$$\frac{d}{d\theta} \int_{\pi/4}^{\cot \theta} \csc^2 y \, dy$$


---

- A.  $\csc^2(\cot \theta)$   
 B.  $-\csc^3 \theta \cot \theta$   
 C.  $\csc^2 \theta \cot \theta$   
 D.  $-\csc^2 \theta \csc^2(\cot \theta)$

ID: 5.4-11

---

14. Find the derivative.

$$y = \int_0^{x^{10}} \cos \sqrt{t} \, dt$$

- A.  $10x^9 \cos(x^5)$
- B.  $\cos(x^5)$
- C.  $\cos(x^5) - 1$
- D.  $\sin(x^5)$

ID: 5.4-13

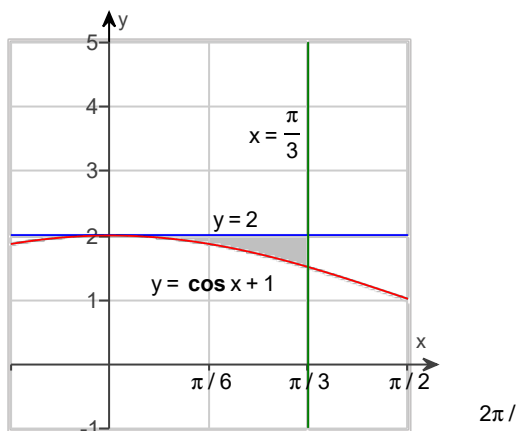
15. Find the total area of the region between the curve and the x-axis.

$$y = \frac{1}{\sqrt{x}}; \quad 1 \leq x \leq 4$$

- A.  $\frac{1}{4}$
- B.  $\frac{1}{2}$
- C. 4
- D. 2

ID: 5.4-23

16. Find the shaded region in the graph.

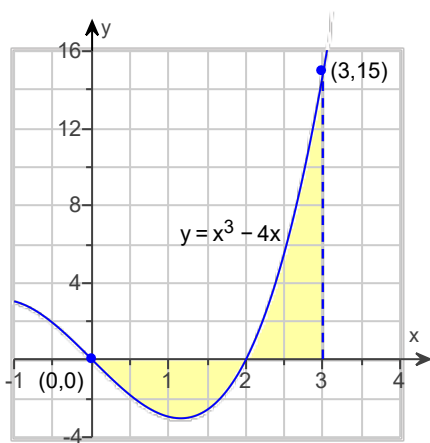


What is the area of the shaded region?

(Simplify your answer, including any radicals. Use integers or fractions for any numbers in the expression. Type an exact answer in terms of  $\pi$ .)

ID: 5.4.61

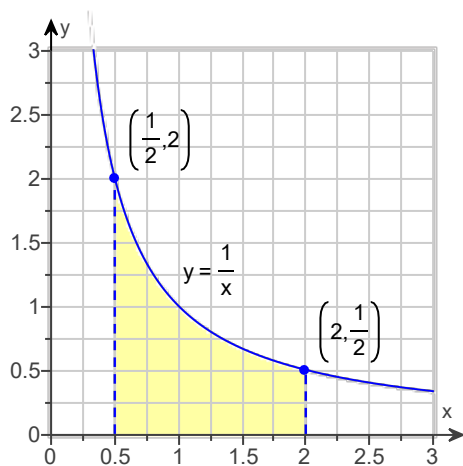
17. Find the area of the shaded regions.



- A.  $\frac{17}{4}$
- B.  $\frac{33}{4}$
- C.  $\frac{9}{4}$
- D.  $\frac{41}{4}$

ID: 5.4-29

18. Find the area of the shaded region.



- A.  $\ln 2$
- B.  $2 \ln 2$
- C.  $3 \ln 2$
- D.  $2 \ln 3$

ID: 5.4-30

19. Solve the initial value problem.

$$\frac{dy}{dx} = x(2+x^2)^4, \quad y(0) = 0$$

- A.  $y = \frac{1}{5}(2+x^2)^5$
- B.  $y = \frac{1}{10}(2+x^2)^5$
- C.  $y = \frac{1}{5}(2+x^2)^5 - \frac{32}{5}$
- D.  $y = \frac{1}{10}(2+x^2)^5 - \frac{16}{5}$

ID: 5.4-35

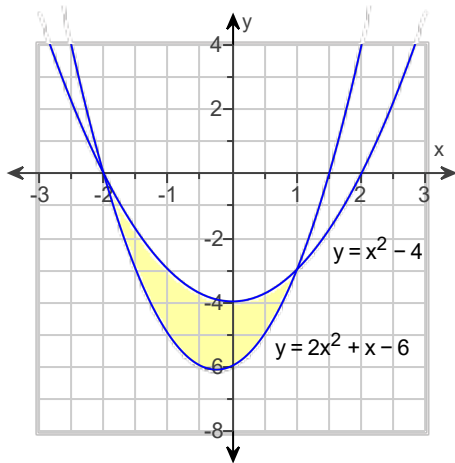
20. Use the substitution formula to evaluate the integral.

$$\int_0^{\pi/20} (1 + e^{\tan 5x}) \sec^2 5x \, dx$$

- A.  $-\frac{e}{5}$
- B.  $5e$
- C.  $e$
- D.  $\frac{e}{5}$

ID: 5.6-8

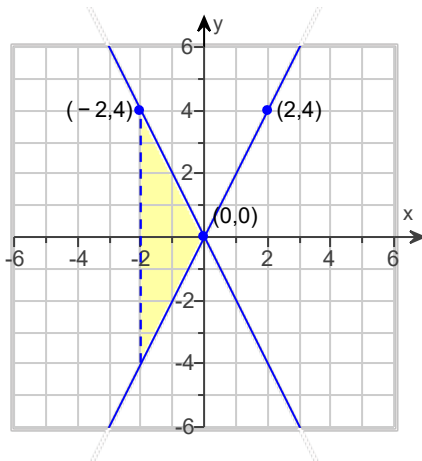
21. Find the area of the shaded region.



- A.  $\frac{9}{2}$
- B.  $\frac{11}{6}$
- C.  $\frac{19}{3}$
- D.  $\frac{8}{3}$

ID: 5.6-18

22. Set up an integral to calculate the area of the shaded region shown below.



- A.  $\int_{-2}^0 (-4x) \, dx$
- B.  $\int_{-2}^0 4x \, dx$
- C.  $\int_{-2}^2 4x \, dx$
- D.  $\int_{-4}^4 (-4x) \, dx$

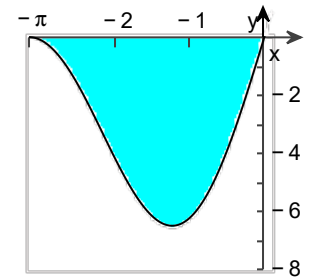
ID: 5.6-36

23. Suppose the area of the region between the graph of a positive continuous function  $f$  and the  $x$ -axis from  $x = a$  to  $x = b$  is 5 square units. Find the area between the curves  $y = f(x)$  and  $y = -3f(x)$  from  $x = a$  to  $x = b$ .

- A. 23 square units  
 B. 20 square units  
 C. 15 square units  
 D. 10 square units

ID: 5.6-35

24. Find the total area of the shaded region shown to the right given by the curve  $y = 6(\sin x)\sqrt{1 + \cos x}$ .



The total area of the shaded region is \_\_\_\_\_ . (Type an exact answer.)

ID: 5.6.49



1. C.  $\sum_{k=0}^4 2(k+1)$

---

2. B. 126

---

3. D.  $2 \cos \pi + 2 \cos \frac{\pi}{2} + 2 \cos \frac{\pi}{3} + 2 \cos \frac{\pi}{4} = -1 + \sqrt{2}$

---

4. C. 1; 4

---

5. C. -10

---

6.  $\frac{125}{24}$

---

7.  $\frac{200}{3}$

---

8. C.  $\frac{609}{4}$

---

9.  $-\frac{238}{3}$

---

10.  $\frac{441}{5324}$

---

11.  $\frac{2 - \sqrt{2}}{4}$

---

12.  $1 - \frac{\pi}{4}$

---

13. D.  $-\csc^2 \theta \csc^2(\cot \theta)$

---

14. A.  $10x^9 \cos(x^5)$

---

15. D. 2

---

16.  $\frac{\pi}{3} - \frac{\sqrt{3}}{2}$

---

17. D.  $\frac{41}{4}$

---

18. B.  $2 \ln 2$

---

19. D.  $y = \frac{1}{10} (2 + x^2)^5 - \frac{16}{5}$

---

20. D.  $\frac{e}{5}$

---

21. A.  $\frac{9}{2}$

---

22. A.  $\int_{-2}^0 (-4x) dx$

---

23. B. 20 square units

---

24.  $2^{7/2}$

---